

Cisco

Exam 640-822

Interconnecting Cisco Networking Devices Part 1

Version: 14.1

[Total Questions: 348]

Topic 1, Multiple Choice Questions Set A**Question No : 1 - (Topic 1)**

Which OSI layer header contains the address of a destination host that is on another network?

- A. application
- B. session
- C. transport
- D. network
- E. data link
- F. physical

Answer: D

Question No : 2 - (Topic 1)

How does TCP differ from UDP? (Choose two.)

- A. TCP provides best effort delivery.
- B. TCP provides synchronized communication.
- C. TCP segments are essentially datagrams.
- D. TCP provides sequence numbering of packets.
- E. TCP uses broadcast delivery.

Answer: B,D

Question No : 3 - (Topic 1)

Which protocol uses a connection-oriented service to deliver files between end systems?

- A. TFTP
- B. DNS
- C. FTP
- D. SNMP
- E. RIP

Answer: C

Question No : 4 - (Topic 1)

Refer to the exhibit.

```
R1#sh int ser0/1
Serial0/1 is up, line protocol is down
  Hardware is GT96K Serial
  Internet address is 192.1.1.1/30
  MTU 1500 bytes, BW 1544 Kbit/sec, DLY 20000 usec,
    reliability 255/255, txload 1/255, rxload 1/255
  Encapsulation HDLC, loopback not set
  Keepalive set (10 sec)
```

```
R2#sh int serial 0/1
Serial0/1 is up, line protocol is down
  Hardware is GT96K Serial
  Internet address is 192.1.1.2/30
  MTU 1500 bytes, BW 1544 Kbit/sec, DLY 20000 usec,
    reliability 255/255, txload 1/255, rxload 1/255
  Encapsulation HDLC, loopback not set
  Keepalive set (10 sec)
```

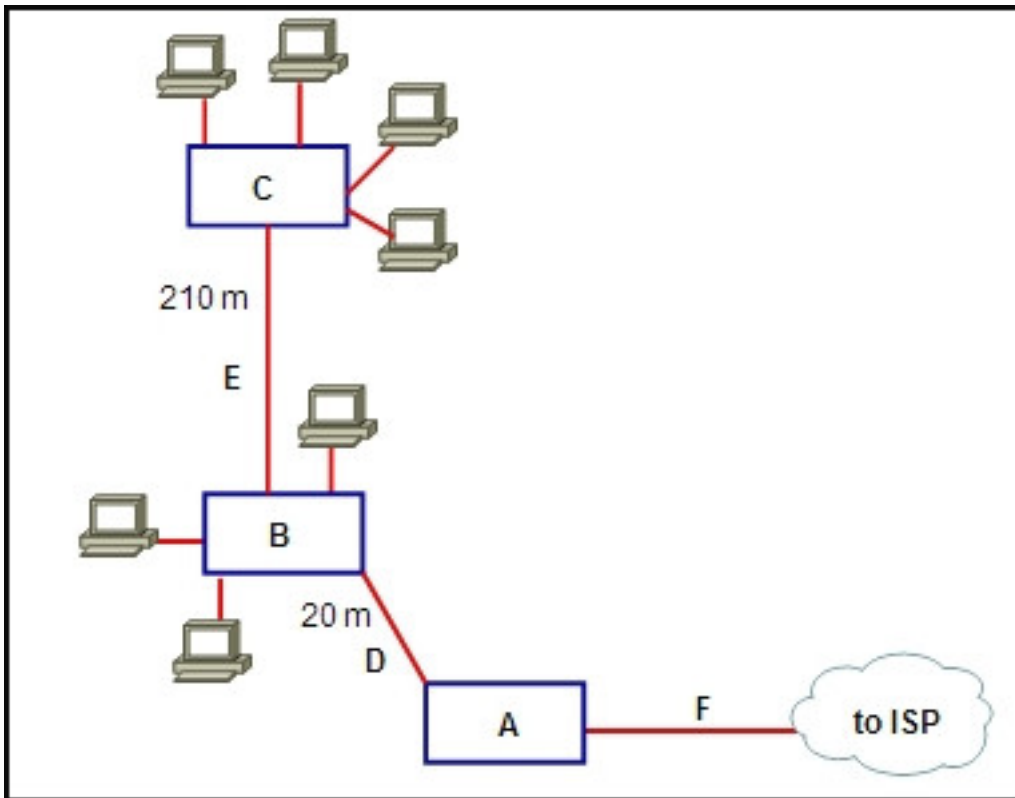
A network technician is unable to ping from R1 to R2. What will help correct the problem?

- A. Ensure that the serial cable is correctly plugged in to the interfaces.
- B. Apply the clock rate 56000 configuration command to the serial0/1 interface of R1.
- C. Configure the serial0/1 interfaces on R1 and R2 with the no shutdown command.
- D. Change the address of the serial0/1 interface of R1 to 192.1.1.4.
- E. Change the subnet masks of both interfaces to 255.255.255.240.

Answer: A

Question No : 5 - (Topic 1)

Refer to the exhibit.



Which types of devices and connections are needed to complete the LAN for optimal performance and cost efficiency?

- A.**
 - A) router
 - B) hub
 - C) switch
 - D) UTP cable
 - E) fiber connection
 - F) fiber connection
- B.**
 - A) switch
 - B) switch
 - C) switch
 - D) UTP cable
 - E) fiber connection
 - F) T-1 connection
- C.**
 - A) router
 - B) switch
 - C) router
 - D) fiber connection
 - E) Cat5 cable
 - F) T-1 connection

D.

- A) router
- B) switch
- C) switch
- D) UTP cable
- E) fiber connection
- F) T-1 connection

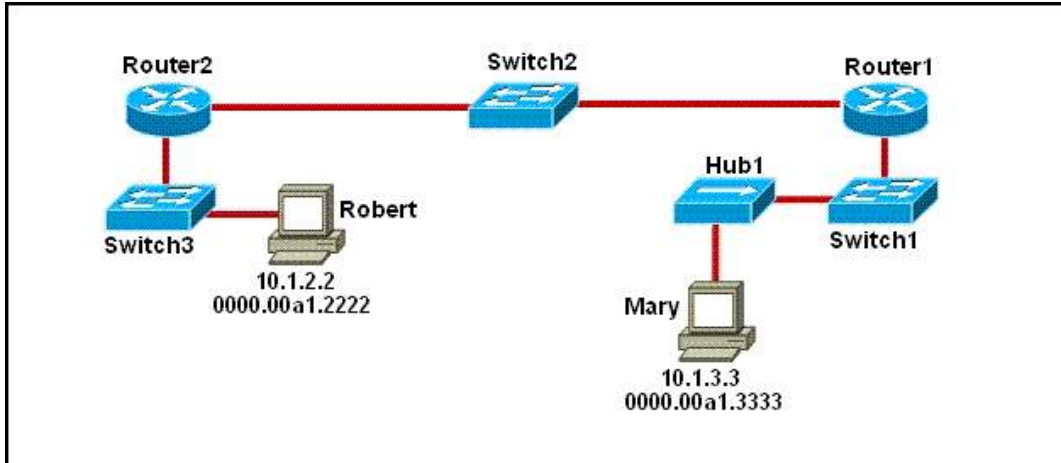
E.

- A) router
- B) hub
- C) switch
- D) fiber cable
- E) cat5 cable
- F) T-1 connection

Answer: D

Question No : 6 - (Topic 1)

Refer to the exhibit.



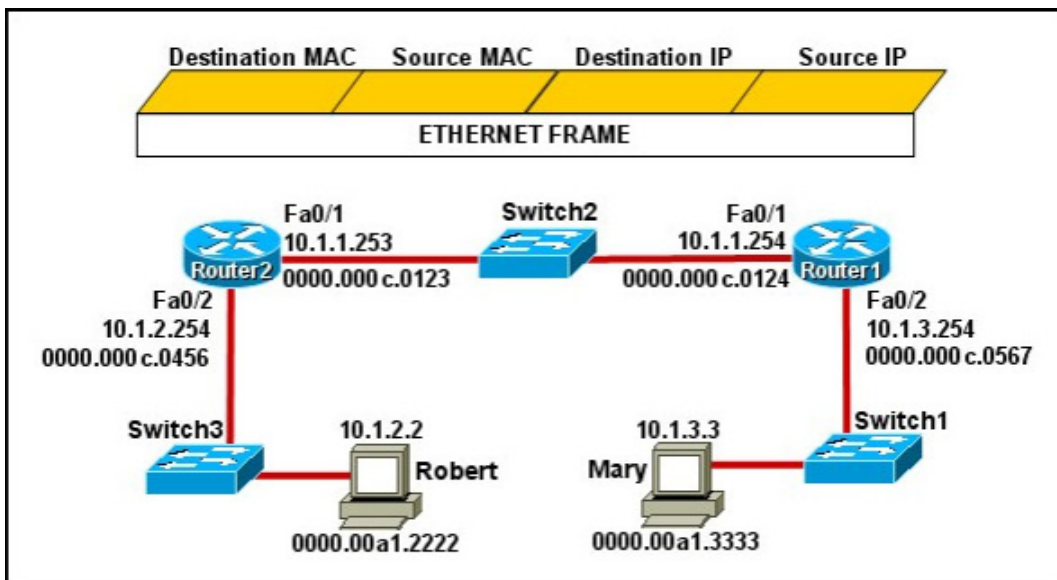
As packets travel from Mary to Robert, which three devices will use the destination MAC address of the packet to determine a forwarding path? (Choose three.)

- A. Hub1
- B. Switch1
- C. Router1
- D. Switch2
- E. Router2
- F. Switch3

Answer: B,D,F

Question No : 7 - (Topic 1)

Refer to the exhibit.



Mary is sending an instant message to Robert. The message will be broken into a series of packets that will traverse all network devices. What addresses will populate these packets as they are forwarded from Router1 to Router2?

A.

Destination MAC	Source MAC	Destination IP	Source IP
0000.00a1.2222	0000.00a1.3333	10.1.2.2	10.1.3.3

B.

Destination MAC	Source MAC	Destination IP	Source IP
0000.000c.0123	0000.000c.0124	10.1.2.2	10.1.3.3

C.

Destination MAC	Source MAC	Destination IP	Source IP
0000.000c.0123	0000.000c.0124	10.1.1.253	10.1.1.254

D.

Destination MAC	Source MAC	Destination IP	Source IP
0000.00a1.2222	0000.00a1.3333	10.1.1.253	10.1.1.254

E.

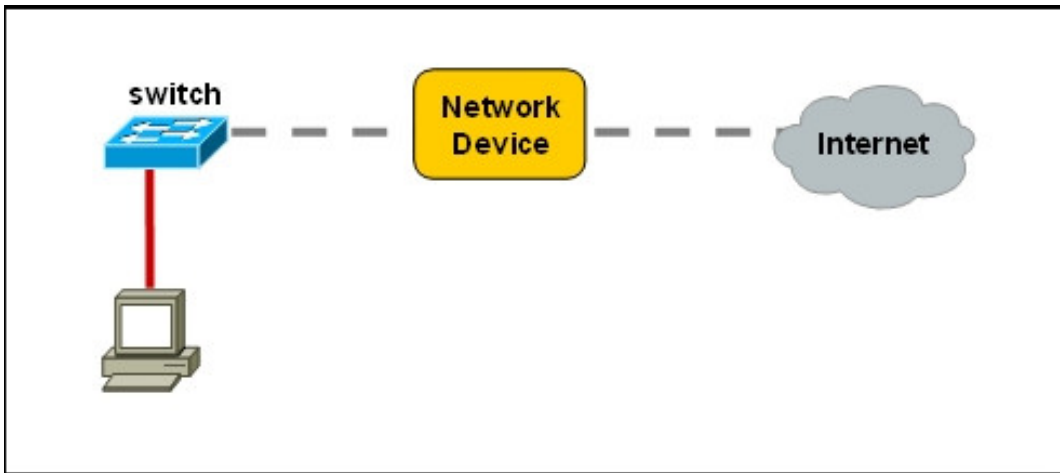
Destination MAC	Source MAC	Destination IP	Source IP
0000.000c.0456	0000.000c.0567	10.1.2.2	10.1.3.3

- A. Exhibit A
- B. Exhibit B
- C. Exhibit C
- D. Exhibit D
- E. Exhibit E

Answer: B

Question No : 8 - (Topic 1)

Refer to the exhibit.



A network device needs to be installed in the place of the icon labeled Network Device to accommodate a leased line attachment to the Internet. Which network device and interface configuration meets the minimum requirements for this installation?

- A. a router with two Ethernet interfaces
- B. a switch with two Ethernet interfaces
- C. a router with one Ethernet and one serial interface
- D. a switch with one Ethernet and one serial interface
- E. a router with one Ethernet and one modem interface

Answer: C

Question No : 9 - (Topic 1)

What technology should be used when a router that connects to a LAN has only one WAN interface, but multiple virtual circuits are needed?

- A. ATM
- B. DSL
- C. ADSL
- D. Cable
- E. Frame Relay

Answer: E

Question No : 10 - (Topic 1)

The network manager states, "The only UDP port allowed on this router interface is 53."

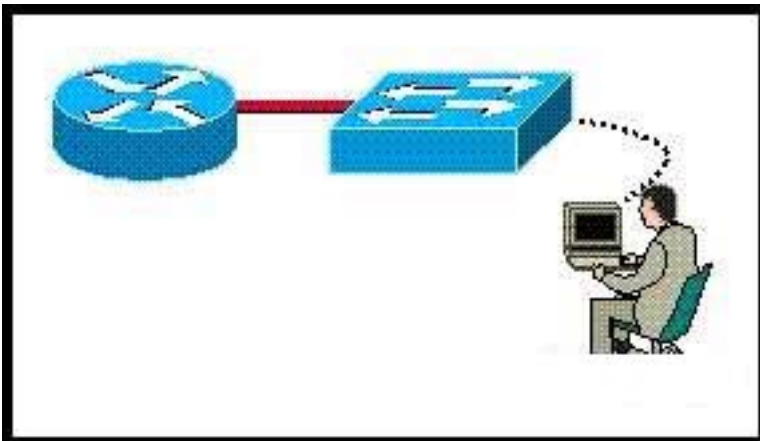
From the statement, what can be concluded about traffic on the router interface?

- A. DNS traffic is allowed.
- B. RIP traffic is allowed.
- C. SMTP traffic is allowed.
- D. Telnet traffic is allowed.

Answer: A

Question No : 11 - (Topic 1)

SW-C has just been added to the network shown in the graphic.



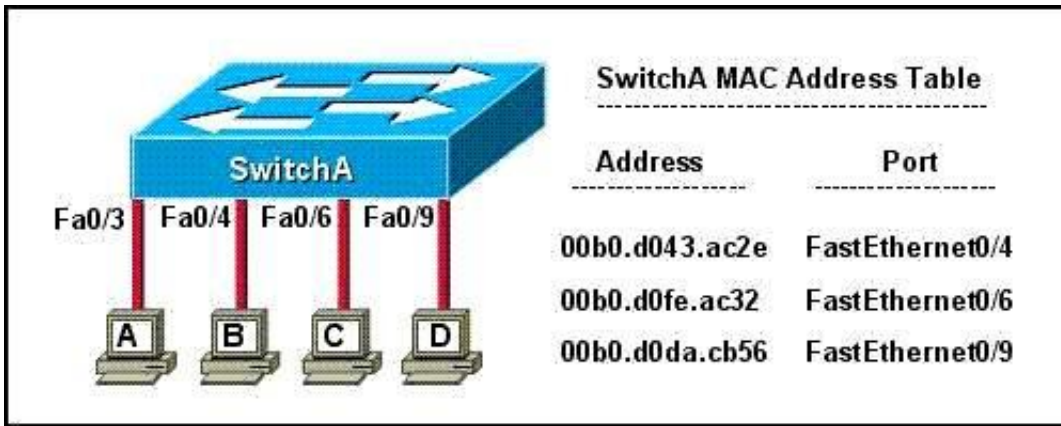
What is the purpose of assigning a default gateway to this switch?

- A. allows connectivity to Router B from the switch prompt
- B. allows console port connectivity to the switch from Host A
- C. allows connectivity to remote network devices from Host B
- D. allows the switch to pass traffic between Host A and Host B

Answer: A

Question No : 12 - (Topic 1)

Refer to the topology and MAC address table shown in the exhibit.



Host A sends a data frame to host D. What will the switch do when it receives the frame from host A?

- A. The switch will add the source address and port to the MAC address table and forward the frame to host D.
- B. The switch will discard the frame and send an error message back to host A.
- C. The switch will flood the frame out of all ports except for port Fa0/3.
- D. The switch will add the destination address of the frame to the MAC address table and forward the frame to host D.

Answer: A

Question No : 13 - (Topic 1)

Refer to the exhibits labeled A through E.